


Solving and Graphing Inequalities Practice

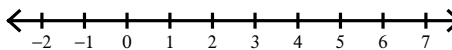
© 2012 Kuta Software LLC. All rights reserved.

Solve each inequality and graph its solution.

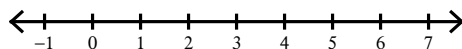
1) $1 + 8v - 6 < -13$



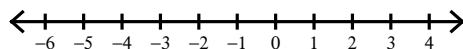
2) $5a - 6a \geq -2$



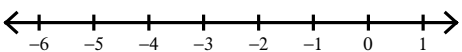
3) $6(8r - 7) > -2r - 6(-7r + 3)$



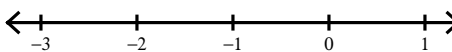
4) $-8x - (5x + 1) \geq -(-7 + 5x)$



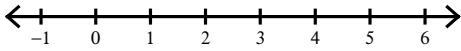
5) $4 \geq -3(-5 - 3k) + 4(k + 7)$



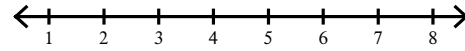
6) $2(1 - 3n) + 6(1 - 8n) \leq 62$



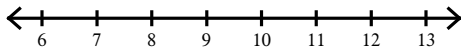
$$7) x - 1 < 5 - 5x$$



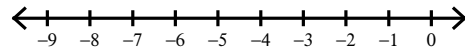
$$8) 4 - p - 8p \leq -11 - 6p$$




$$9) 8(-x - 6) \geq -112$$



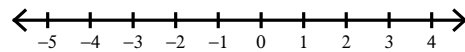
$$10) 139 > -1 - 5(8x + 4)$$



$$11) -6n + 2(n - 1) \leq -6n$$



$$12) 8(7 + 4m) < 19 - 5m$$



Solving and Graphing Inequalities Practice

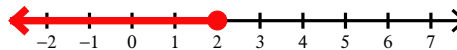
© 2012 Kuta Software LLC. All rights reserved.

Solve each inequality and graph its solution.

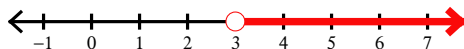
1) $1 + 8v - 6 < -13$



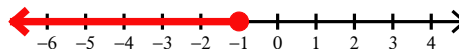
2) $5a - 6a \geq -2$



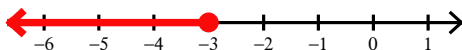
3) $6(8r - 7) > -2r - 6(-7r + 3)$



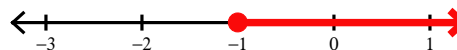
4) $-8x - (5x + 1) \geq -(-7 + 5x)$



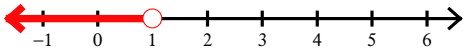
5) $4 \geq -3(-5 - 3k) + 4(k + 7)$



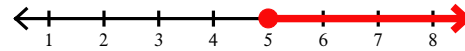
6) $2(1 - 3n) + 6(1 - 8n) \leq 62$



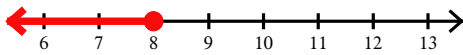
$$7) x - 1 < 5 - 5x$$



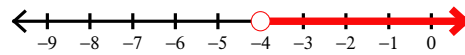
$$8) 4 - p - 8p \leq -11 - 6p$$



$$9) 8(-x - 6) \geq -112$$



$$10) 139 > -1 - 5(8x + 4)$$



$$11) -6n + 2(n - 1) \leq -6n$$



$$12) 8(7 + 4m) < 19 - 5m$$

